

3 Figurenfolgen

Figur 1

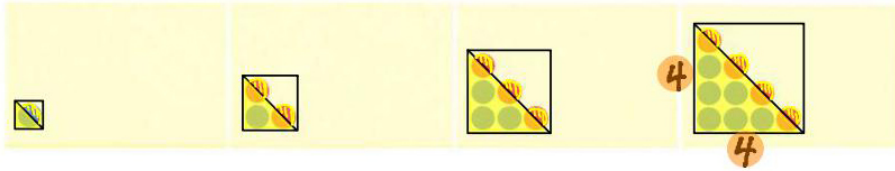
Figur 2

Figur 3

Figur 4

.....

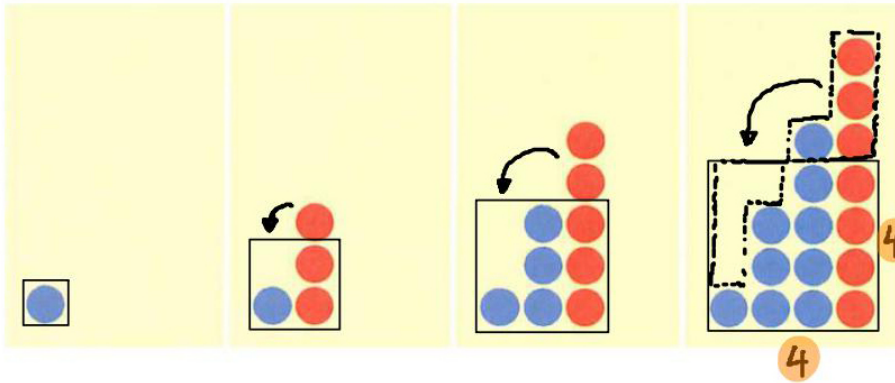
Figur x (Term)



Anzahl Kreise:

$$\frac{4^2}{2} + 4 \cdot \frac{1}{2}$$

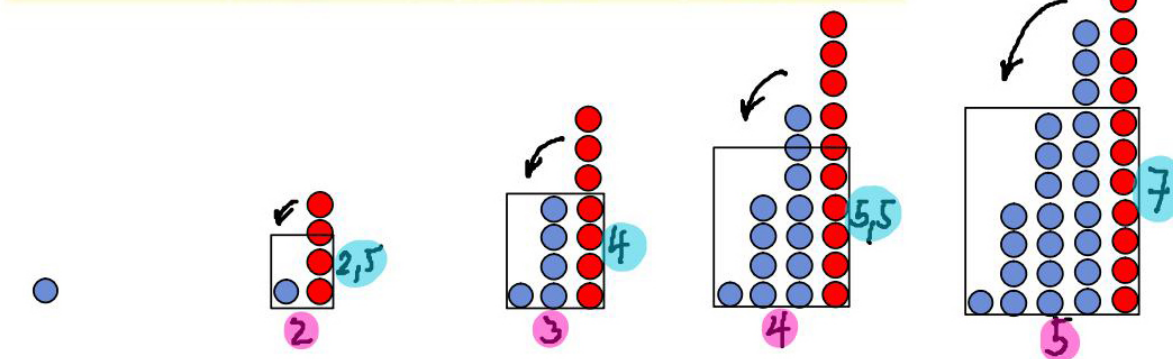
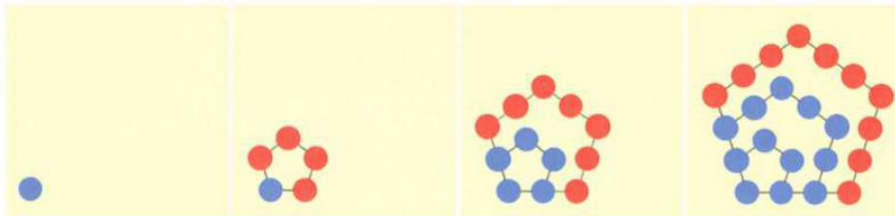
$$\Rightarrow \underline{\underline{\frac{x^2}{2} + x \cdot \frac{1}{2}}}}$$



Anzahl Kreise:

$$4^2$$

$$\Rightarrow \underline{\underline{x^2}}$$



$$\Rightarrow \underline{\underline{x \cdot (1,5x - 0,5)}}$$